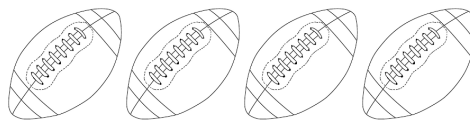









# COMPARING AND ORDERING

## INSTRUCTIONS

Use the picture of sports balls below to help you answer the questions.



1. Which group of balls has the **greatest** number of balls?
  - a. basketball 
  - b. football 
  - c. soccer 
2. Which group of balls has the **least** number of balls?
  - a. basketball 
  - b. football 
  - c. soccer 

## INSTRUCTIONS

Circle the correct answer to each question.

3. Choose the number that is the greatest.
  - a. 2
  - b. 9
  - c. 5
  - d. 4
4. Choose the number that is the least.
  - a. 72
  - b. 68
  - c. 75
  - d. 69

# COMPARING AND ORDERING

## INSTRUCTIONS

Choose the correct symbol to compare each set of numbers.

5.  $8 \square 6$

a.  $<$

b.  $+$

c.  $>$

d.  $=$

6.  $29 \square 81$

a.  $<$

b.  $+$

c.  $>$

d.  $=$

## INSTRUCTIONS

Fill in the answers below.

7. Write the numbers below in order from least to greatest on the number line.

36, 34, 35



8. Write three numbers in order from greatest to least.

\_\_\_\_\_, \_\_\_\_\_, \_\_\_\_\_